





English	Maths	Reading	Topic
<p>Watch Julia Donaldson's Zog</p>  <p><a href="https://www.bbc.co.uk/iplayer/group/p06vkmht">https://www.bbc.co.uk/iplayer/group/p06vkmht</a></p> <p>List all of the skills that Zog must learn at dragon school. Then present these skills in the form of a poster, titled 'How to become a dragon'.</p> <p>Remember: Your poster needs to include short, snappy sentences/phrases and needs to be eye catching.</p>	<p>This week we are looking at measurement. Remember when we measure anything we must start at 0. Have a go at this game today.</p> <p><a href="https://www.topmarks.co.uk/maths-games/measuring-in-cm">https://www.topmarks.co.uk/maths-games/measuring-in-cm</a></p>	 <p>Look at the picture above and then answer these questions.</p> <ol style="list-style-type: none"><li>1. Whose bedroom is this?</li><li>2. What can you tell about his personality and interests?</li><li>3. How old do you think the boy mouse is? Why?</li><li>4. Which fairy tale do you think they might be reading?</li><li>5. How long do you think they have been reading for?</li><li>6. Do they read every night before bed?</li></ol>	<p><b>Science</b></p> <p>The princess can't find Zog, she thinks he is stuck on another island! Can you help her by designing and making your own boat that will float on water?</p> <p>Plan the materials that you are going to use and what your boat will look like. You might want to test your materials to see if they will float or not.</p> <p>You could race your boat. What would make it go faster?</p>



In the story, the princess dreams of being something else when she grows up. Can you write a dream for yourself for when you grow up? What do you want to be and why?

Remember to use capital letters, full stops and conjunctions.



Imagine you were flying on the back of Zog. What would you see whilst you were up in the air, and where would you choose to go?

Remember to use capital letters, full stops, adjectives and conjunctions.

Think about the game you played yesterday, now have a go at answering these fluency questions.

<p>5a. How long are these objects in centimetres?</p> <p>A. </p> <p>B. </p> <p>☆</p>	<p>5b. How long are these objects in centimetres?</p> <p>A. </p> <p>B. </p> <p>☆</p>
<p>6a. Sam draws a 3cm line. He starts at the arrow. What number will he finish at?</p> <p></p> <p>☆</p>	<p>6b. Alex draws a 5cm line. She starts at the arrow. What number will she finish at?</p> <p></p> <p>☆</p>

Complete the comprehension questions based on Meerkat mail. Attached below.

Read your favourite books. Design a costume for your favourite character. Label your costume and tell me why you have designed that costume referring back to the book.

### Geography



Choose one of the countries that you researched last week and create a fact file. Think about... Which continent is it in? What festivals do they celebrate? How many people live in the country? Find the longest river. Has the country got any volcanoes or mountains?

### PSHE

Do all superheroes wear capes? Talk about real life superheroes with your children, i.e. parents, grandparents, doctors, nurses, police officers, teachers, fire officers, religious leaders. Why are they superheroes?

Research Captain Tom Moore and discuss what he has done in the past and what he is currently doing for our NHS.

Explain that Captain Tom Moore will celebrate his 100<sup>th</sup> birthday on Wednesday 30<sup>th</sup>.




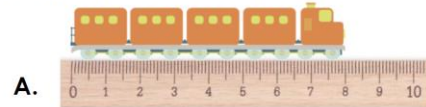
Together create a birthday card and upload it on Seesaw so we can help this amazing man celebrate his birthday.



Imagine you have arrived at your chosen destination after Zog has flown you there. Can you write a postcard from that place to the people back at home? Remember to include capital letters, full stops, adjectives, conjunctions and the four sentence types.

Now have a go at these reasoning questions.

**4a. Which is the odd one out?**



**Explain your answer.**



Using the book you are currently reading answer these questions.

1. Write the names of two main characters.
2. Write down two words you did not know the meaning of, with your adult find the meaning.
3. Write two sentences from the book that are true and two that are false.
4. Write a question sentence about your book.

**Art**

Use a shape found within your home to create a picture like this.



5a. Zoe and Mike are measuring the length of a pencil.



Zoe says,



This pencil is 8cm long.

Mike says,



This pencil is 6cm long.

Who is correct? Explain your answer.




R




Zog's 'super power' is being able to fly. If you could have a super power, what would it be and why?

Remember to be as creative as you can. Try to include capital letters, full stops, adjectives, conjunctions and the four sentence types.

Complete your mental arithmetic for the week. Attached below.





What is the same about these books?

What is different about these books?

What is your favourite out of the two and why?

Home Learning – 27.04.2020

Monday	/14
$7 + 4 =$	
$10 - 2 =$	
$25 + 22 =$	
$57 - 24 =$	
$48 + 35 =$	
$73 - 45 =$	
$5 \times 10 =$	
$10 \times 5 =$	
$6 \times 2 =$	
$10 \times 10 =$	
$60 \div 10 =$	
$30 \div 5 =$	
$10 \div 2 =$	
$40 \div 10 =$	

Tuesday	/14
$3 + 11 =$	
$27 - 12 =$	
$25 + 33 =$	
$44 - 31 =$	
$55 + 25 =$	
$73 - 34 =$	
$\frac{1}{2}$ of 16 =	
$\frac{1}{2}$ of 20 =	
$\frac{1}{4}$ of 12 =	
$\frac{1}{4}$ of 20 =	
$\frac{1}{3}$ of 6 =	
$\frac{1}{3}$ of 18 =	
$\frac{3}{4}$ of 20 =	
$\frac{3}{4}$ of 12 =	

Wednesday	/14
$7 + 6 =$	
$17 - 4 =$	
$55 + 12 =$	
$63 - 32 =$	
$44 + 56 =$	
$61 - 33 =$	
$5 + 3 + 2 =$	
$12 + 4 + 4 =$	
$16 + 5 + 2 =$	
$4 + 6 + 10 =$	
$7 + 10 + 3 =$	
$5 + 5 + 10 =$	
$10 + 3 + 7 =$	
$16 + 6 + 3 =$	

Thursday	/14
$10 + 4 =$	
$14 - 6 =$	
$22 + 34 =$	
$66 - 24 =$	
$37 + 36 =$	
$63 - 26 =$	
$6 + \square = 20$	
$7 + \square = 20$	
$4 + \square = 20$	
$6 + \square = 20$	
$\square + 2 = 20$	
$\square + 1 = 20$	
$\square + 7 = 20$	
$\square + 8 = 20$	

Friday	/14
$13 + 5 =$	
$20 - 6 =$	
$26 + 32 =$	
$77 - 36 =$	
$59 + 26 =$	
$72 - 26 =$	
$12 + \square = 20$	
$\square + 14 = 20$	
$6 \times 5 =$	
$30 \div 10 =$	
$\frac{1}{2}$ of 30 =	
$\frac{1}{4}$ of 40 =	
$\frac{1}{3}$ of 24 =	
$\frac{3}{4}$ of 40 =	

The suffixes  
-ment, -ness  
and -ful

# The Suffixes -ment, -ness and -ful

j e i q u r s p i e r  
 v n h a p p i n e s s  
 q j c p l a i p w o t  
 x o h c e r c l d p a  
 k y e q n g a a k l g  
 x m e o t u r i l a d  
 m e r r i m e n t y h  
 t n f k f e f n c f a  
 x t u z u n u e d u o  
 e l l v l t l s f l l  
 o u s a d n e s s p u

enjoyment	argument
sadness	merriment
careful	happiness
playful	plentiful
plainness	cheerful

enjoyment

sadness

careful

playful

plainness

argument

merriment

happiness

plentiful

cheerful

This week, we are looking at the suffixes -ment, -ness and -ful. Unscramble each of the words. They are all this week's spelling words.

Copy the letters in the numbered boxes to the other boxes with the same number in the code word. If you complete the puzzle correctly, the code word should make another of your spelling words.

1. noejymnet

--	--	--	--	--	--	--	--	--	--	--	--

2. snssdea

--	--	--	--	--	--	--	--

3. fucarle

○							
---	--	--	--	--	--	--	--

1  
4. lalfuyp

						○	
--	--	--	--	--	--	---	--

5. laepisnns

								○	
--	--	--	--	--	--	--	--	---	--

6. mutaegrn

							○		
--	--	--	--	--	--	--	---	--	--

7. nemrtmeir

		○							
--	--	---	--	--	--	--	--	--	--

8. sapseinph

○									
---	--	--	--	--	--	--	--	--	--

2  
9. tiufellnp

								○		○
--	--	--	--	--	--	--	--	---	--	---

Code Word:

--	--	--	--	--	--	--	--	--	--

1 2 3 4 5 6 7 8



## Meerkat News



### SUNNY COMES HOME!

Earlier today, a weary and slightly wiser Sunny Meerkat arrived home to the waiting arms of his family. The brave young adventurer was returning from a week-long journey to find a different lifestyle among his Mongoose relatives.

Sunny had been fed up with life at home for some time before his trip. “I was sick of the heat,” he explains. “I didn’t want to babysit my younger brothers and sisters and I found lookout duty boring. I just needed to get away!”

So, did he find what he was looking for? “Meeting my cousins was amazing! I just couldn’t believe how different they all were.”

But the young Meerkat admits, “I did get homesick. I missed the weather, my mum’s cooking (especially beetles on toast) and sleeping in a safe warm place. But most of all, I missed my family.”

Answer these questions...

1. When did Sunny arrive home?
2. Why is Sunny described as brave?
3. How long had Sunny been away from his family?
4. Why did Sunny leave home?
5. What did Sunny miss most of all?

