


English



Watch the retelling of Tiddler

<https://www.youtube.com/watch?v=qcTQADUywZY>

Create a missing poster for Tiddler, use lots of descriptive language to describe his appearance and personality.

Maths

This week's maths will be linked to the white rose resources found online.

Please follow this link.

<https://whiterosemaths.com/homelearning/year-2/>

Each day has a different video and questions linked to the video.

Reading



Look at the picture and answer the questions below.


1. What do you think the girl was doing in the sea?
2. Do you think the girl is worried? Tell me why.
3. If you were the girl in this picture, what would you do?
4. Is the shark a kind or unkind creature? Tell me why you think this.

Topic

Art

Draw your own fish and decorate it using different materials that you can find around your home.





On Wednesday, Tiddler is thinking of a tall tale he can tell his teacher, can you think of your own tall tale Tiddler could tell his teacher.



Think about when Tiddler gets lost in the middle of the Ocean. Write a diary entry about how he might be feeling and what he might have seen.

Complete the comprehension on Prince Cinders below.

DT
Use things from around your home to create a pirate ship, remember it must stay afloat.

Create a book review for your favourite book, it might look a bit like this.

A Book Review by _____		Your star rating for this book ☆☆☆☆☆	
Title: _____		Author: _____	
Plot What happens? Are there any plot twists? Did you find the plot interesting?	Characters Who are the main characters? Who was your favourite character? Why?		
Your opinion Did you like the book? What was your favourite part? Why?	Recommend Would you recommend this book to a friend? Why or why not?		
			

Geography
Using a map locate the oceans around the world.

Can you find the biggest and smallest oceans?



Draw your own underwater picture with your own sea creatures, label and describe the animals you have drawn.



Thinking of the underwater scene you drew, choose one of your sea creatures and create a fact file on the sea creature. Think about including, **what it eats, what ocean it lives in, what does it look like, is it related to any other sea creature?**


Think about your favourite story you have read. Answer these questions...

A genie lands in the midpoint of the story and grants the two main characters three wishes.

1. What do they wish for and why?
2. Would their wishes have changed anything about the story? How?

PSHE

Tiddler tells a lot of tall tales, can you write a letter explaining to him why it is not a good idea to lie to people.



What is the same about these stories?
What is different about these stories?
Which one is your favourite?

Science

Research the Ocean habitat and a pond habitat. Create a poster with characteristics that are similar and different.

Home learning 11/05/2020

Monday	/14
$5 + 1 =$	
$5 + 4 =$	
$13 - 5 =$	
$74 + 10 =$	
$16 - 4 =$	
$14 + 3 + 4 =$	
$49 - 17 =$	
$_ + 3 = 9 =$	
$25 + 8 =$	
$5 + 9 + 3 =$	
$47 + 33 =$	
$67 - 30 =$	
$70 - _ = 20$	
$4 \times 2 =$	

Tuesday	/14
$6 + 3 =$	
$7 - 3 =$	
$14 \times 0 =$	
$3 \times 5 =$	
$16 \div 2 =$	
$30 \div 5 =$	
$\frac{1}{2}$ of 14 =	
$36 + 29 =$	
$69 - 24 =$	
$\frac{1}{2}$ of 26 =	
$40 - 17 =$	
$54 + _ = 82$	
$\frac{1}{3}$ of 27 =	
$\frac{3}{4}$ of 20 =	

Wednesday	/14
$6 + 2 =$	
$4 + 8 =$	
$12 - 7 =$	
$53 + 20 =$	
$17 - 6 =$	
$5 + 13 + 2 =$	
$68 - 6 =$	
$_ + 4 = 7$	
$34 + 7 =$	
$7 + 8 + 5 =$	
$51 + 39 =$	
$59 - 20 =$	
$80 - _ = 30$	
$6 \times 5 =$	

Thursday	/14
$7 + 1 =$	
$19 - 6 =$	
$13 \times 1 =$	
$2 \times 8 =$	
$50 \div 10 =$	
$45 \div 5 =$	
$\frac{1}{4}$ of 24 =	
$27 + 44 =$	
$77 - 34 =$	
$\frac{1}{2}$ of 32 =	
$60 - 18 =$	
$37 + _ = 69$	
$\frac{1}{3}$ of 21 =	
$\frac{3}{4}$ of 32 =	

Friday	/14
$6 + 4 =$	
$14 - 3 =$	
$5 \times 1 =$	
$53 + 30 =$	
$4 \times 2 =$	
$25 \div 5 =$	
$14 + _ = 19$	
$18 \div 2 =$	
$24 + 36 =$	
$53 - 35 =$	
$\frac{1}{2}$ of 20 =	
$\frac{1}{4}$ of 16 =	
$\frac{1}{3}$ of 24 =	
$\frac{3}{4}$ of 16 =	

Week 3

Words Ending in -tion

Words ending in -tion

d	s	i	e	i	f	e	l	u	s	p	c	h
s	e	n	l	c	p	j	n	a	s	f	x	b
s	c	t	r	x	y	s	a	d	u	i	p	k
j	t	r	u	y	k	f	t	d	b	c	p	e
w	i	o	b	b	c	w	i	i	t	t	m	g
c	o	d	o	x	k	g	o	t	r	i	m	r
f	n	u	n	s	l	r	n	i	a	o	o	s
w	y	c	k	i	l	t	a	o	c	n	t	t
p	o	t	i	o	n	t	l	n	t	e	i	a
b	s	i	k	p	t	e	e	d	i	y	o	t
e	b	o	y	r	s	w	a	a	o	g	n	i
k	v	n	s	h	r	u	f	t	n	a	s	o
o	g	f	m	a	g	k	o	p	t	i	o	n

station

fiction

motion

national

section

addition

subtraction

potion


option

introduction

station	addition
fiction	subtraction
motion	potion
national	option
section	introduction

Spelling Crossword

This week we are looking at words that end in -tion. Work out the answer to each clue and write the letters in the right boxes.



Across:

1. the place to catch a train
2. a choice
3. a maths operation where numbers are put together
4. a mixture of ingredients often made in fairy tales
5. movement

Down:


1. a maths operation where a number is taken away from another number

Challenge Task

Which four of your spelling words are not in the crossword puzzle? Write them down.

Can you match the words to their meaning?

- | | |
|----------------|--|
| introduction • | • a made-up story |
| section • | • a part of something |
| national • | • to do with a nation |
| fiction • | • the start of a piece of writing or a lesson that often gives important information |



As midnight struck, Prince Cinders suddenly changed from the big, hairy monkey back into himself again. Fortunately, the princess thought she had saved her by scaring away the brute. Unfortunately, Prince Cinders was far too shy, and he sprinted away, losing his trousers on the way!

The princess picked up the trousers and decided to hold fitting sessions to discover who owned the trousers. Men came from miles around to try them on, even the unkind brothers, but they didn't fit anyone. But they fitted Prince Cinders! The brothers sneered and they couldn't believe their eyes...

Answers these questions.

1. What time did the clock strike?
2. What had Prince Cinders changed into?
3. Why did Prince Cinders run away?
4. What did Prince Cinders lose when he ran away?
5. Why did the Princess run the fitting session?